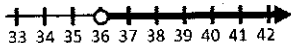
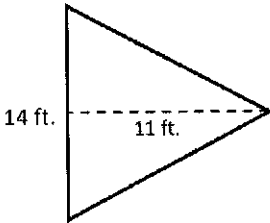
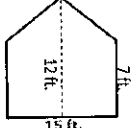
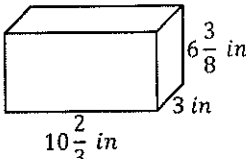
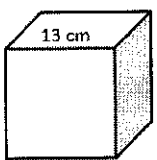
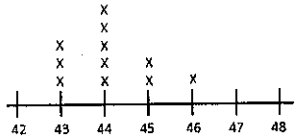
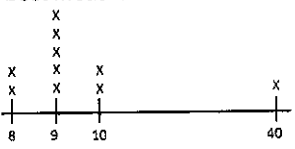


Name: _____

(H) Weekly Math Review – Q3:Week 8

Teacher: _____

Monday	Tuesday	Wednesday	Thursday																				
<p>Solve.</p> <p>$8,327.8 - 12.034$</p> <p>$923.01 + 74.289$</p>	<p>Find the quotient.</p> <p>$\frac{3}{15} \div \frac{4}{9} =$</p>	<p>Solve.</p> <p>72.32×0.04</p> <p>$0.5216 \div 0.08$</p>	<p>Find the quotient.</p> <p>$\frac{4}{7} \div \frac{6}{15} =$</p>																				
<p>Fill in the blank.</p> <p>7.5 ft. = _____ in.</p>	<p>What percent of 64 is 16?</p>	<p>Kristin bought a pack of 12 pencils for \$1.35. How much was each pencil?</p>	<p>Game Stop is having a 35% off sale on all their video games. If a game is originally \$40.00, how much will it be during the sale?</p>																				
<p>What is the value of $9(4x - 4)$, when $x = 5$?</p>	<p>Evaluate the expression.</p> <p>$(10 + 4) \times 7 - 45 \div 9$</p>	<p>Write an expression that represents the sum of r and 7 divided by 5.</p>	<p>Write an equivalent expression for $27x + 18$.</p>																				
<p>List 3 values that would make this inequality true.</p> <p>$2n \geq 12$</p> <p>_____, _____, _____</p>	<p>Solve for y</p> <p>$13 = 6 + y$</p>	<p>A typical human stomach can hold up to 4 cups of food. Write an inequality to represent how many cups of food a stomach can hold.</p>	<p>Write the inequality this number line represents.</p> 																				
<p>Find the rule. Solve for n.</p> <table border="1" data-bbox="116 913 427 1066"> <thead> <tr> <th>X</th> <th>Y</th> </tr> </thead> <tbody> <tr> <td>5</td> <td>20</td> </tr> <tr> <td>6</td> <td>24</td> </tr> <tr> <td>7</td> <td>n</td> </tr> <tr> <td>8</td> <td>32</td> </tr> </tbody> </table> <p>Rule: _____</p>	X	Y	5	20	6	24	7	n	8	32	<p>Find the area.</p> 	<p>Find the rule. Solve for n.</p> <table border="1" data-bbox="787 913 1097 1066"> <thead> <tr> <th>X</th> <th>Y</th> </tr> </thead> <tbody> <tr> <td>10</td> <td>14</td> </tr> <tr> <td>13</td> <td>17</td> </tr> <tr> <td>n</td> <td>19</td> </tr> <tr> <td>18</td> <td>22</td> </tr> </tbody> </table> <p>Rule: _____</p>	X	Y	10	14	13	17	n	19	18	22	<p>Erin is going to paint a wall in her house. She needs to find the area of the wall so she knows how much paint to purchase. What is the area of her wall?</p> 
X	Y																						
5	20																						
6	24																						
7	n																						
8	32																						
X	Y																						
10	14																						
13	17																						
n	19																						
18	22																						
<p>Find the Volume.</p> 	<p>Find the surface area.</p> 	<p>An ice cube tray holds 12 ice cubes. Each edge of the cube is 5 cm. What is the volume of all 12 cubes?</p>	<p>Walt received a package that is $2\frac{1}{3}$ inches long, $6\frac{3}{4}$ inches high, and $8\frac{1}{2}$ inches wide. What is the surface area of the package?</p>																				
<p>The ratio of boys to girls in a class is 2:3. If there are 12 girls, how many total students are in the class?</p>	<p>Mean _____ Median _____</p> <p>Mode _____ Range _____</p> 	<p>Jonathan's Math test scores were 87, 93, 85, 62, and 95. What was his mean score?</p>	<p>10 families were asked how many pets they have. Here is the data.</p> <p>2, 3, 3, 5, 4, 2, 4, 0, 1, 3</p> <p>Find the mean, median, and mode of the data.</p>																				
<p>Find the median and mean of the data. Which reflects the best measure of the center?</p> 	<p>Find the median and mean of the data. Which reflects the best measure of the center?</p> <p>13, 14, 12, 13, 23, 22, 21</p>	<p>Find the median and mean of the data. Which reflects the best measure of the center?</p> <p>28, 32, 65, 159, 22, 20, 33</p>	<p>Find the median and mean of the data. Which reflects the best measure of the center?</p> <p>43, 38, 37, 57, 57, 58, 45</p>																				